

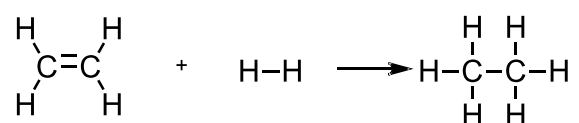
ADDITION REACTIONS – TEST 1

QUESTION 1

The product of the addition of bromine to ethene is?

- A 1,1-dibromoethane
- B 1,2-dibromoethane
- C 1,1-dibromoethene
- D 1,2-dibromoethene

QUESTION 2



The above reaction is an example of

- i. Addition
- ii. Hydrogenation
- iii. Reduction
- iv. Substitution

- A i
- B i and ii
- C i, ii and iii
- D all of the above

QUESTION 3

Which of the following reactions does not require a catalyst?

- A $\text{CH}_2\text{CH}_2 + \text{Cl}_2$
- B $\text{CH}_2\text{CH}_2 + \text{H}_2$
- C $\text{CH}_2\text{CH}_2 + \text{H}_2\text{O}$
- D $\text{CH}_2\text{CH}_2 + \text{HCl}$

QUESTION 3

When chlorine is reacted with propene, how many products are possible?

- A 1
- B 2
- C 3
- D 4

QUESTION 4

2-chlorobutane can be made from the reaction of

- A 1-butene and chlorine
- B 1-butene and HCl
- C 2-butene and chlorine
- D All of the above

QUESTION 5

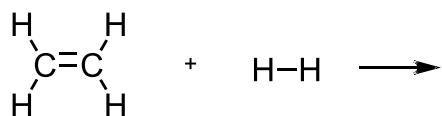
Some addition reactions can result in a number of products. What is the smallest alkene that will result in two or more products when reacted with HCl?

- A ethene
- B propene
- C butene
- D pentene

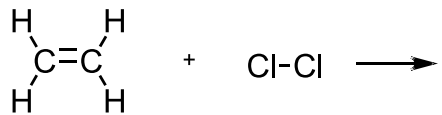
QUESTION 6

Complete the following equations.

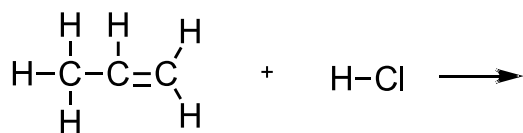
A



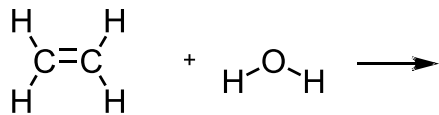
B



C



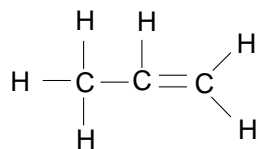
D



QUESTION 7

Reacting a substance with iodine tests for the presence of unsaturated hydrocarbon chains in various substances such as oils. The amount of iodine reacted is used as a measure for the degree of unsaturation for the hydrocarbons present.

A typical substance capable of undergoing such a reaction with iodine is shown below:



- (a) Write an equation for the reaction of the above substance with iodine (I₂).
- (b) Name the type of reaction represented by the equation.
- (c) Name the product of the reaction.

QUESTION 3

Explain how the degree of saturation can be determined by reacting an unsaturated molecule with hydrogen.

Solution

ANSWERS

QUESTION 1 Answer is B

QUESTION 2 Answer is C

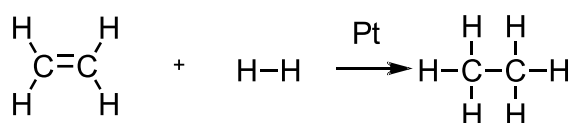
QUESTION 3 Answer is A

QUESTION 4 Answer is B

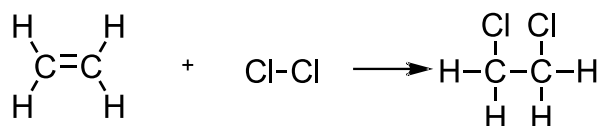
QUESTION 5 Answer is B

QUESTION 6

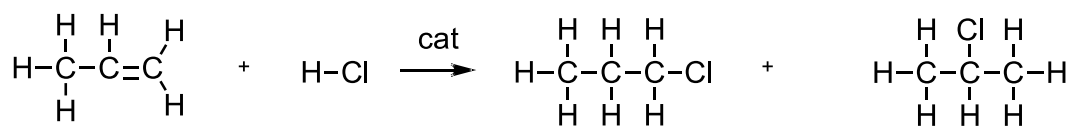
(a)



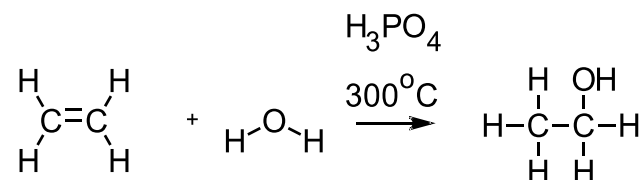
(b)



(c)

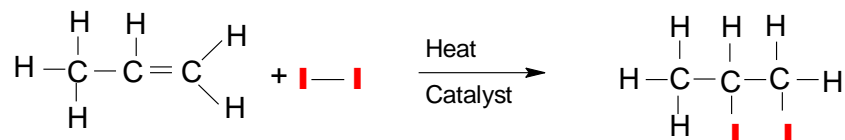


(d)



QUESTION 7

- (a) $CH_3CHCH_2(g) + I_2 \rightarrow CH_3CHICH_2I(g)$ In the presence of a catalyst and high temperature.



- (b) Addition reaction
(c) 1,2-diiodopropane

QUESTION 8

One hydrogen molecule will react for each double bond in a molecule. Therefore, the degree of unsaturation can be determined by comparing the mole of reactant with the mole of hydrogen that reacted with it. If the ratio is 1:1, then there was one double bond in the molecule. If the ratio was 1:2, then there were two double bonds in the molecule and so forth.